

4 times table

Name: _____

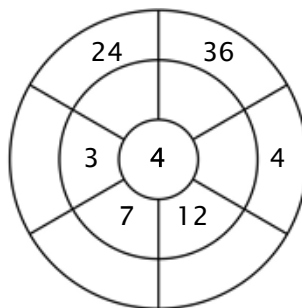
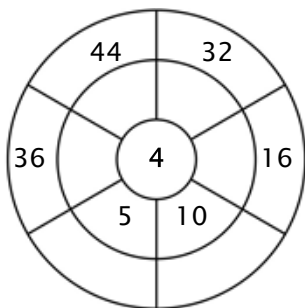
Exercise 1:

Color in all of the boxes that are the solutions of this time table.

36	37	8	20	34
11	4	24	22	16
23	2	44	6	40
3	36	20	48	12
24	19	32	28	44

Exercise 2:

Complete the circle by multiplying the number in the center by the middle ring to get the outer numbers.



Exercise 3:

Fill in the correct product.

a) $11 \times 4 = \underline{\quad}$

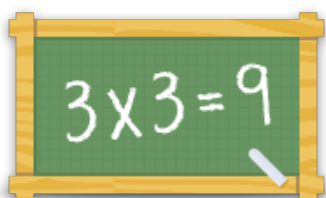
b) $3 \times 4 = \underline{\quad}$

c) $10 \times 4 = \underline{\quad}$

d) $8 \times 4 = \underline{\quad}$

e) $4 \times 4 = \underline{\quad}$

f) $6 \times 4 = \underline{\quad}$



For more worksheets, games and exercises:
www.timestables.co.uk